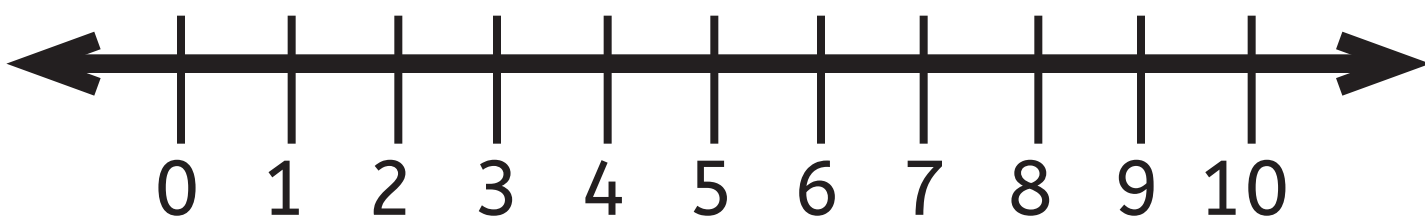


Greyson has three marbles. His friend gave him 4 more marbles. How many marbles does Greyson have now?

Draw it!


Show me!



Write the equation

$$\underline{\hspace{2cm}} + \underline{\hspace{2cm}} = \underline{\hspace{2cm}}$$

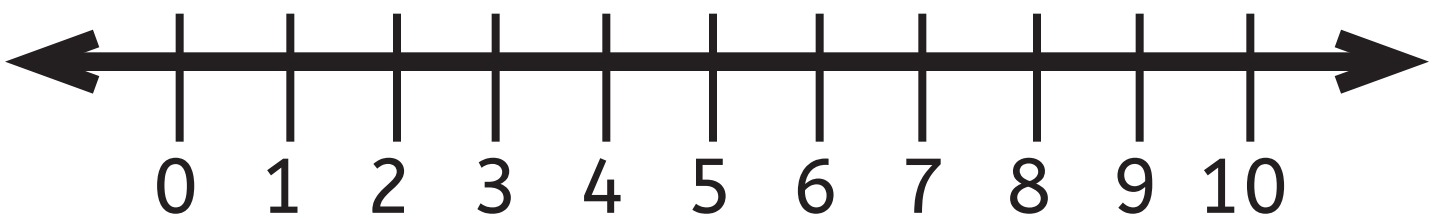
Answer!



Jack owns 7 pairs of pants. His Mother bought him 2 more pairs of pants. How many pants does jack own, now?

Draw it!


Show me!



Write the equation

$$\underline{\quad} + \underline{\quad} = \underline{\quad}$$

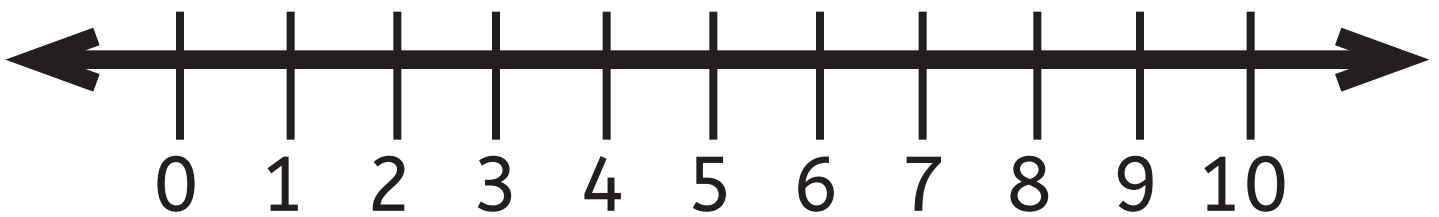
Answer!



Alison owns 4 necklaces. She wants 3 more for her birthday. How many would Alison own if she gets them?

Draw it!


Show me!



Write the equation

$$\underline{\hspace{2cm}} + \underline{\hspace{2cm}} = \underline{\hspace{2cm}}$$

Answer!

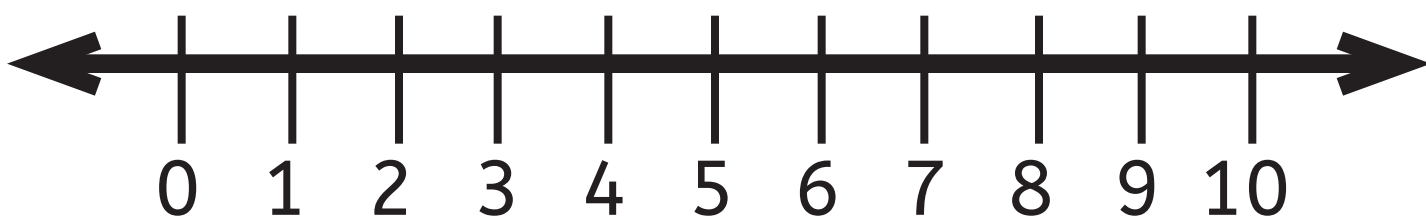


Ella went trick-or-treating and received 4 lollipops. At home she already has 5 lollipops. How many lollipops does Ella have?

Draw it!




Show me!



Write the equation

$$\underline{\quad} + \underline{\quad} = \underline{\quad}$$

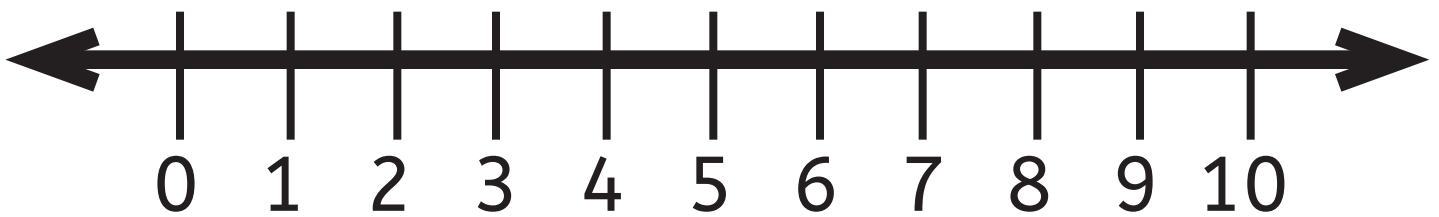
Answer!



Sam saw 8 frogs jump into the pond.
Sam's brother saw 2 frogs already in the pond.
How many frogs are in the pond?

Draw it!


Show me!



Write the equation

$$\underline{\quad} + \underline{\quad} = \underline{\quad}$$

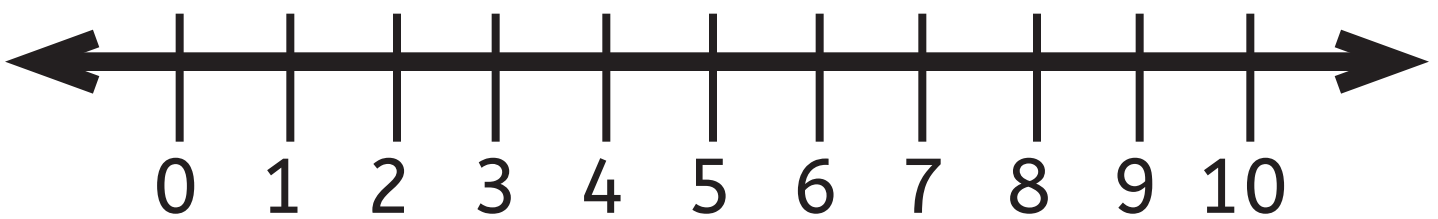
Answer!



Liz has 3 brown cats and 3 black cats living in her barn. How many cats are in Liz's barn?

Draw it!


Show me!



Write the equation

$$\underline{\quad} + \underline{\quad} = \underline{\quad}$$

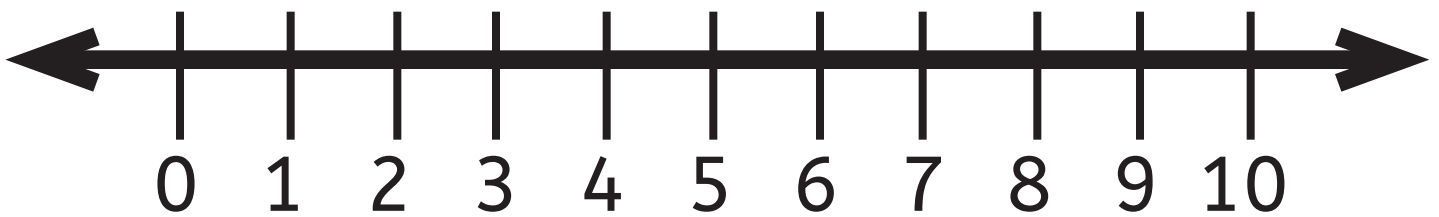
Answer!



Ben has 2 toy trucks and was given 7 race cars. How many toy vehicle's does Ben have now?

Draw it!


Show me!



Write the equation

$$\underline{\quad} + \underline{\quad} = \underline{\quad}$$

Answer!

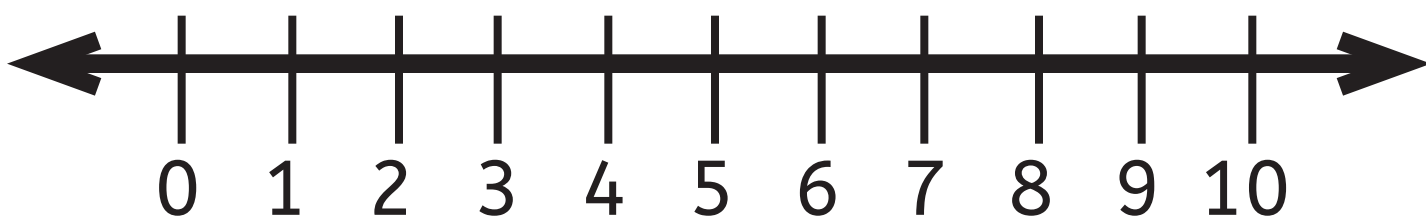


I have a big fish tank in my room. It has 5 beta fish, and 3 goldfish in it. How many fish do I have all together?

Draw it!




Show me!



Write the equation

$$\underline{\quad} + \underline{\quad} = \underline{\quad}$$

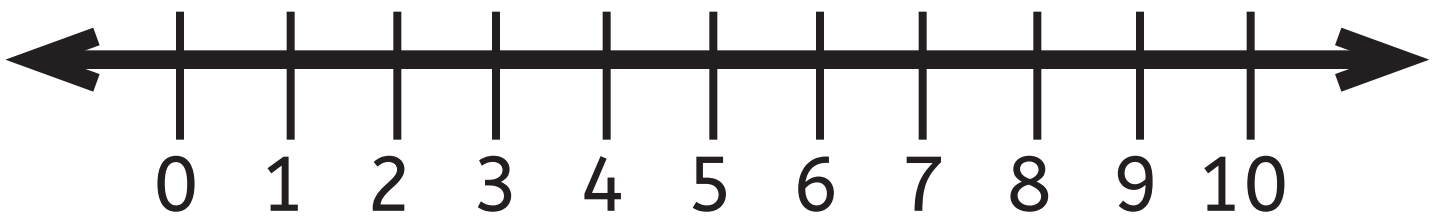
Answer!



If Lilly builds 2 snowmen and Caleb builds 2 snowmen, how many snowman would they have?

Draw it!


Show me!



Write the equation

$\underline{\quad} + \underline{\quad} = \underline{\quad}$

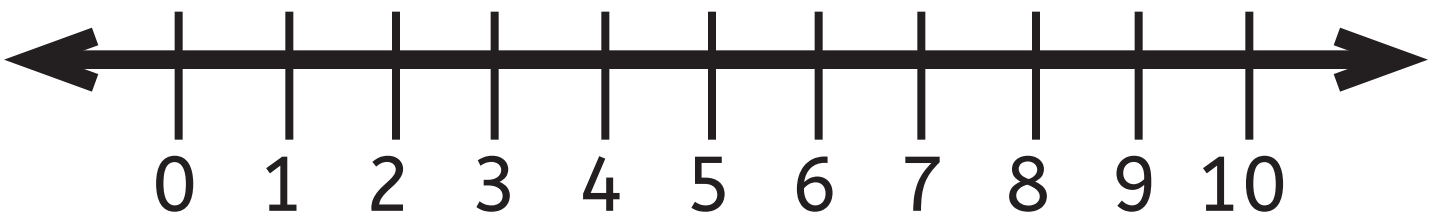
Answer!



Jackson ate 1 slice of pizza. Eli ate 3 slices of pizza. How many slices of pizza did they eat all together?

Draw it!


Show me!



Write the equation

Answer!

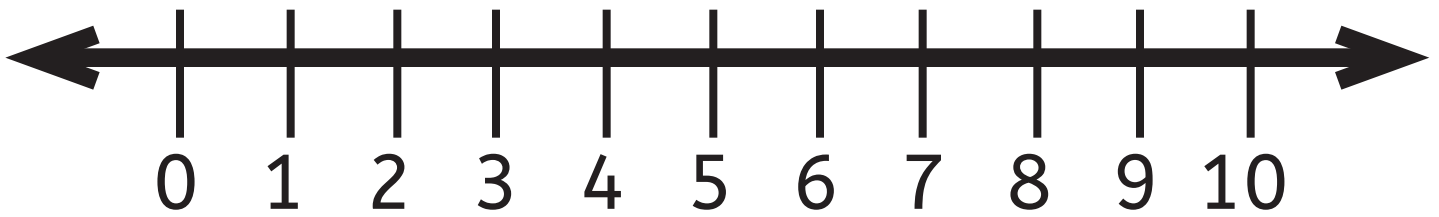
$$\underline{\quad} + \underline{\quad} = \underline{\quad}$$



Hudson loves to color. He has 6 red crayons and 4 green crayons. How many crayons does Hudson have?

Draw it!


Show me!



Write the equation

$$\underline{\quad} + \underline{\quad} = \underline{\quad}$$

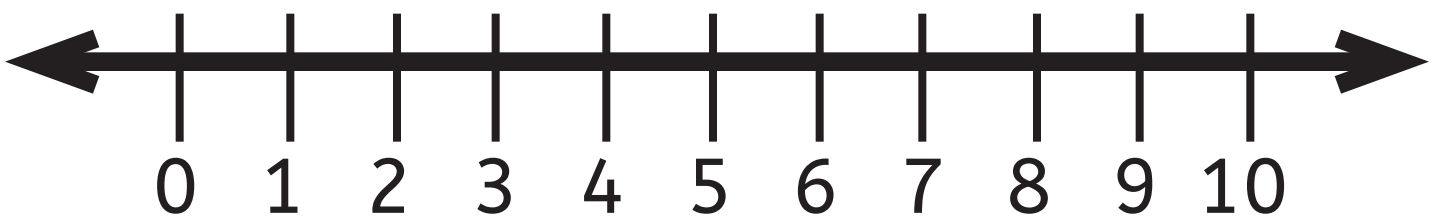
Answer!



Andrea loves to read. Last week she read 4 books! This week she has read 5 books!
How many books has Andrea read?

Draw it!

Show me!



Write the equation

$$\underline{\quad} + \underline{\quad} = \underline{\quad}$$

Answer!

