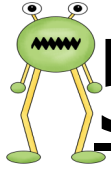
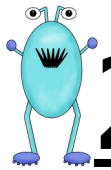


Name _____

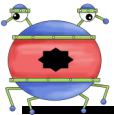
Fill in the missing numbers. Can you count on? MCC.K.CC.2.



5



2



4




3

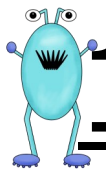


6

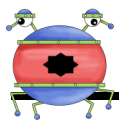
Name _____
Fill in the missing numbers. Can you count on? MCC.K.CC.2.



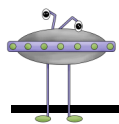
10



14



16



13



12
