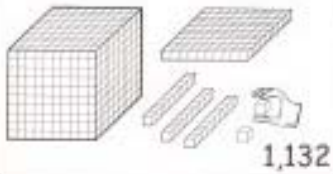


DRAW A PICTURE



MAKE A MODEL




CREATE A GRAPH



GUESS AND CHECK



LOOK FOR A PATTERN



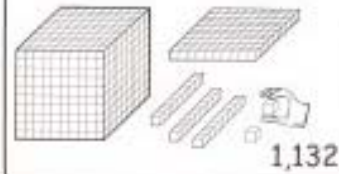
WRITE AN EQUATION
(NUMBER SENTENCE)

$$3 \times \square = 15 \quad 12 - N = 6$$

DRAW A PICTURE



MAKE A MODEL



CREATE A GRAPH



GUESS AND CHECK



LOOK FOR A PATTERN



WRITE AN EQUATION
(NUMBER SENTENCE)

$$3 \times \square = 15 \quad 12 - N = 6$$